

**G.A.V. PUBLIC SCHOOL , PATAUDA
(WINTER BREAK) HOLIDAY HOMEWORK
CLASS-IV**

Subject: English

1. Write word meaning :
 - i. Confusion
 - ii. Chants
 - iii. Curious
 - iv. Hues
 - v. Elated
 - vi. Leaned
2. Tick the correct answer:
 - i. How many days does the week at Curious Town have?
 - a. Ten
 - b. Six
 - c. Three
 - d. Two
 - ii. What according to Mukesh was a zoo all about?
 - a. Looking after animals
 - b. Collecting animals
 - iii. What did uncle Rustom want to paint on the beach?
 - a. Mango trees
 - b. Coconut trees
 - c. Shells
 - d. Rocks
 - iv. What had uncle Rustom invented?
 - a. Car
 - b. Bus
 - c. Time machine
 - d. Gadget
3. Give one word answer:
 - i. Were uncle Rustom and the author invisible when they walked into the store room?
 - ii. Think of name for the river in Curious Town and write it.
 - iii. Who started the disturbance at the zoo?
 - iv. Who was the star attraction at the zoo?
4. Answer the following questions:
 - i. What did Mukesh announce one morning?
 - ii. Why did Mukesh want to start a zoo?
 - iii. Why do you think the poet calls the Curious Town?
 - iv. Why did the author love to see his strict father as a child?
 - v. Why was the author elated?
5. Give the paste form of the verbs:
 - i. Sleep

- ii. Sing
 - iii. Fly
 - iv. Come
 - v. Play
 - vi. Go
 - vii. Read
 - viii. Sing
 - ix. Bring
6. Fill in the blanks with simple present tense
- i. My brother _____ (talk) very fast.
 - ii. My father _____ (watch) the news.
 - iii. I _____ (complete) my work.
 - iv. He _____ (comes) to school.
 - v. Shyam _____ (read) in VII class.
 - vi. Sudha _____ (like) chocolates.
 - vii. We _____ (go) out for a morning walk daily.
7. Fill in the blanks with present continues:
- i. I _____ (sing) at church today.
 - ii. The boy _____ (play)ball after school.
 - iii. They _____ (cry).
 - iv. The baby _____ (sleep) in history.
 - v. We _____ (visit) the museum in the afternoon.
 - vi. He _____ (stand).
 - vii. Anthony _____ (sit) in the chair.
8. Fill in the blanks with simple present perfect tense:
- i. I _____ the cloths. (wash)
 - ii. She _____ my food. (Eat)
 - iii. You _____ not _____ the movie . (see)
 - iv. _____ Ritu _____ speak yet? (speak)
 - v. Isha and Ria _____ her dress.(destroy)
 - vi. We _____ not _____ the station before the train left. (Reach)
 - vii. The girls _____ well. (Play)
9. Fill in the blank with simple past tense:
- i. Columbus _____ America. (discover)
 - ii. Waterma _____ fountain pen.(invent)
 - iii. He _____ there. (Go)
 - iv. My brother _____ from London yesterday. (Arrive)
 - v. I _____ a good movie yesterday. (See)
 - vi. His father _____ when he was at only a same child. (Dead)

Activity

Roll no. 1 to 10 make a chart on A4 sheet present tense, Roll no. 11 to 20 past tense , Roll no. 21 and 32 noun

Computer assignment

Q1. What is multimedia?

Ans _____
_____.

Q2. What is window media player?

Ans _____
_____.

Q3. What is home page?

Ans _____
_____.

Q4. What is the home button on the command bar used for?

Ans _____
_____.

Q5. What is hyperlink?

Ans _____
_____.

Q6. What is URL ? Give an example.

Ans _____

_____.

Q7. What is web browser ? Give some examples.

Ans _____

_____.

Q8. Mention some uses of multimedia programs.

Ans _____
_____.

ACTIVITY:- Write 10 uses of internet on A4 sheet.

EVS Assignment

Answer the very short question :-

- 1 write the full form of CNG.
- 2 write two examples of lever.
- 3 write two methods used for purifying water.
- 4 which planet is known as blue planet? 5 how many moons on Jupiter?

answer the short questions:-

- 1 what is work ?
- 2 what is the difference between breeze and gale?
- 3 what is solar system?
- 4 what is satellite name the natural satellite of the earth ?
- 5 why morning and evening are Cooler Than noon time?
- 6 what is energy? name any two sources of energy.
- 7 Define 1 humidity 2) wind 3) rotation
- 8 why is mars called the red planet?
- 9 what are stars? why do they appear tiny? name the star closest to the Earth.
- 10 what is revolution? How seasons are caused?

Answer long questions

- 1 Explain chlorination and filtration .
- 2 With the help of a diagram explain how day and night are caused.
- 3 How can water be purified through sedimentation and decantation?
- 4 explain gravity with the help of an example.
- 5 what is simple machine describe any two simple machines?

EVS

learn chapter 10 "force work energy "Chapter 11 "air,water&weather
"chapter 12" the solar system" question answer and book exercise.

* roll number 1 to 15 draw water cycle on a chart using colour paper.

* roll number 16 To 32 make a model on solar system

कक्षा चौथी

शब्दार्थ - गुजरिया, मुखड़ा, प्रवचन, भरोसा, होले होले, परलोक, सविधान, उत्साह, करतब,
पंछी, अंधेरा, उजाला, सांझ, पर्वत आदि

प्रश्न 1_ निम्नलिखित लघु प्रश्न के उत्तर और याद करो?

1. मेले में कौन खो गया है?
2. किससे और क्यों नजर लगने का खतरा है?
3. नसरुद्दीन किस का प्रवचन सुनने गए थे?
4. मुल्ला नसरुद्दीन नदी पार करने से क्यों डरते थे?
5. 26 जनवरी 1950 को क्या हुआ था?
6. राष्ट्रीय गान के पश्चात कितने तोपों की सलामी दी गई?
7. सूरज कैसे जागता है?
8. सूरज नदी के साथ किस प्रकार खेलता है?
9. धरती किस का स्वागत करती है?
10. सूरज कब ढलता है ?

प्रश्न दो_ निम्नलिखित प्रश्नों के उत्तर लिखिए और याद करिए:

- 1 कवि गुजरिया के कौन-कौन से गुणों के बारे में बताता है?
- 2 गुजरिया के मुख की सुंदरता की तुलना किससे की गई है?
- 3 महात्मा ने मुल्क को कैसे मुख बनाया?
4. इनाम पाठ से आपको क्या शिक्षा मिलती है?

5 मोटरसाइकिल पर सवार किस प्रकार के करतब दिखा रहे थे?

6. परेड में कौन कौन से ऐसे नृत्य थे जो भारत की प्रगति और उन्नति का संदेश दे रहे थे?

7. सूरज के जागने का पौधों और पक्षियों पर क्या प्रभाव पड़ता है?

8. सूरज के थकने के क्या कारण हैं?

प्रश्न 3_ सही मिलान कीजिए_

पत्ते. सब पर छा जाती है

पक्षी. कल कल कर बहती है

किरणें. सुनहरे हो जाते हैं

नदी. मधुर स्वर में गाते हैं

भाग

प्रश्न 4 - विराम चिन्ह किसे कहते हैं के कितने भेद होते हैं उसके नाम लिखो और याद करो?

प्रश्न 5 - रिक्त स्थान की पूर्ति कीजिए:

1. प्रश्न पूछे जाने वाले वाक्य में..... प्रयोग किया जाता है।

2. आश्चर्य घृण वाले वाक्यों में..... का प्रयोग किया जाता है।
3. वाक्यों में कई नाम साथ आने पर..... का प्रयोग किया जाता है।

4. वाक्य के पूरा होने पर..... का प्रयोग किया जाता है।

प्रश्न 6_ पर्यायवाची शब्द_

नदी, आदमी, पर्वत, चंद्रमा, वर्षा, बादल, फूल, सुबह, रात, अमृत,, गाय, देवता, बिजली, गणेश आदि ।

MATHS

1.Each question carry 1 mark. 1*10

a. Each side of polygon is a-----.

b. 8cm 3mm equals-----.

c. The perimeter of a square is 144m. Then the side of the square is -----.

d. How many edges does a square pyramid have-----.

e. How many faces are there in a cuboid-----.

f. Mr. Roy saves Rs. 250 every month. How much money will he save in 1 year?

g. The cost of six books is Rs. 120. What is the cost of 4 books?

h. With the help of a ruler draw a line segment of length 7cm, 8.5cm.

i. A line has _____ end points

j. Draw a ray.

2. Each question carry 2 marks.

a. Nine fans cost Rs. 13480. What is the cost of 13 fans?

b. Draw different types of polygons with their names.

c. Draw a quadrilateral named ABCD. Write the names of the four sides and two vertices.

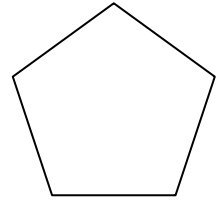
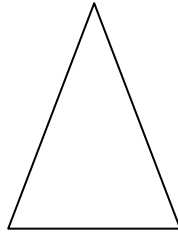

d. A circle has a radius of 6cm. How long is its diameter.

e. Find the perimeter of a square each of whose sides is 9cm.

f. Find the perimeter of the rectangle whose length is 54cm and breadth is 24cm.

g. Draw a circle and write faces, edges and vertices.

h. Draw the possible line of symmetry of each of the following figures and letters:



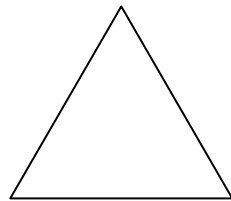
i. Draw a circle of radius 5cm using compass. Name its centre as O. Draw and mark the following: a. radius OM b. a diameter XY c. chord MN.

3. Each question carry 3 mark.


a. A factory produces 6816 motor horn in 2 days. How does it produce in 3 weeks.

b. Name the sides and vertices of each of the following triangles and quadrilateral.


a.)



b.)



c.) Look at the adjoining figure. Name.



a. the radius shown in the circle.

b. the diameters shown in the circle.

C.all the chords shown in the circle.

d.The length and breadth of rectangle park are 96metres and

74 metres .A boy runs 2 times around the park.Find the distance covered by him.

e.The perimeter of rectangle field is 164m. If its length is 50 m.Find its breadth.

f.A worker earned Rs.1080 in 8 days .How much did he earn in 3 days.

g.There are 2275 trees in 25 rows . How many trees are there in 72 rows.

h.A car runs 285 km on 15 litres of petrol .How many km can it run on 22litres of petrol.

i.Find the perimeter of the square each of whose sides is 11cm.

j.Draw a cuboid and write its faces vertices and edges.

:::::Activity:::::

1.Rollnumber1to5::-cube,cuboid,coneandsphereonchartpaper&writetherefaces,verticesandedges.

Rollnumber6to10::-Writelettersatozonchartpaper&drawallpossiblelinesofsymmetry.

Rollnumber11to15::-Drawdifferenttypesofpolygonchartpaper.

Rollnumber16to20::-Draw6clocksonchartpaper&showtime7:15,9:30,10:45,9:00,11:20,3:40

Rollnumber21to25::-makecalendarfor2019onchartpaper.

Rollnumber26to32::-writemonthsoftheyearandnumberofthedaysonchartpaper.

